




[Home](#) > Draw symbols of.....

Draw symbols of.....

Question:

Draw symbols of: (i) Oil reservoir (ii) Oil filter (iii) Heat exchanger (iv) Unidirectional fixed displacement pump.

Answer:

(i) Oil Reservoir		(iii) Heat Exchanger	
(ii) Oil Filter		(iv) Unidirectional fixed displacement pump	